

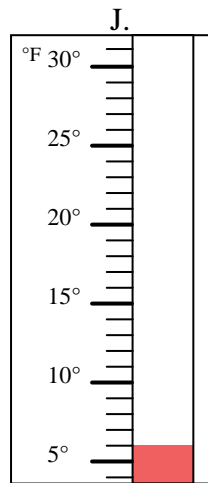
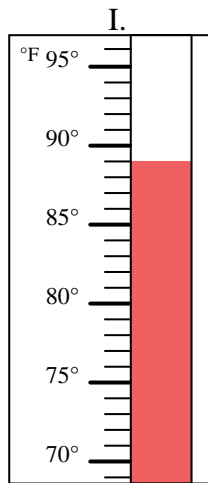
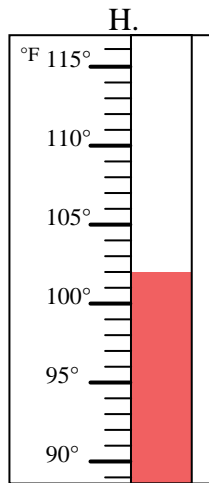
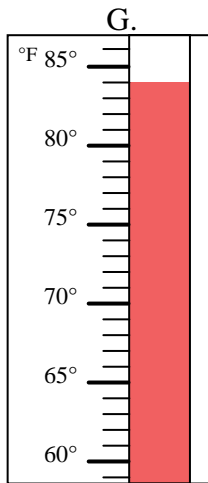
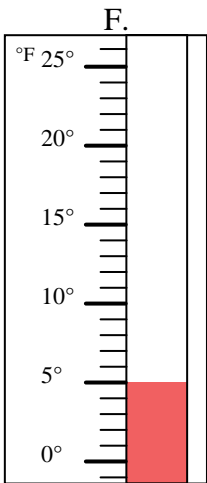
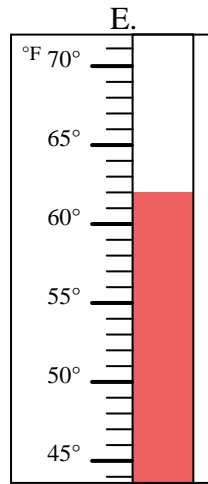
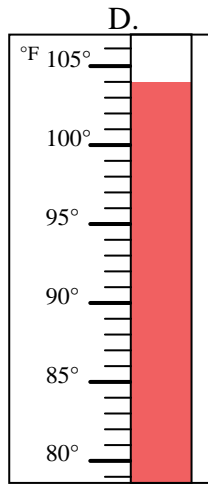
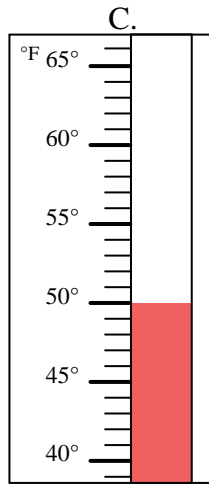
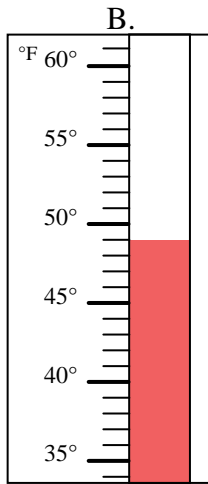
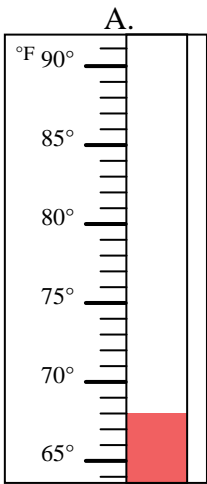


Determine which letter best answers each question.

**Answers**

- 1) Which thermometer best represents the temperature 104°? \_\_\_\_\_
- 2) Which thermometer best represents the temperature 6°? \_\_\_\_\_
- 3) Which thermometer best represents the temperature 5°? \_\_\_\_\_
- 4) Which thermometer best represents the temperature 89°? \_\_\_\_\_
- 5) Which thermometer best represents the temperature 49°? \_\_\_\_\_
- 6) Which thermometer best represents the temperature 68°? \_\_\_\_\_
- 7) Which thermometer best represents the temperature 50°? \_\_\_\_\_
- 8) Which thermometer best represents the temperature 102°? \_\_\_\_\_
- 9) Which thermometer best represents the temperature 62°? \_\_\_\_\_
- 10) Which thermometer best represents the temperature 84°? \_\_\_\_\_

1. \_\_\_\_\_
2. \_\_\_\_\_
3. \_\_\_\_\_
4. \_\_\_\_\_
5. \_\_\_\_\_
6. \_\_\_\_\_
7. \_\_\_\_\_
8. \_\_\_\_\_
9. \_\_\_\_\_
10. \_\_\_\_\_





Determine which letter best answers each question.

- 1) Which thermometer best represents the temperature 104°?  D
- 2) Which thermometer best represents the temperature 6°?  J
- 3) Which thermometer best represents the temperature 5°?  F
- 4) Which thermometer best represents the temperature 89°?  I
- 5) Which thermometer best represents the temperature 49°?  B
- 6) Which thermometer best represents the temperature 68°?  A
- 7) Which thermometer best represents the temperature 50°?  C
- 8) Which thermometer best represents the temperature 102°?  H
- 9) Which thermometer best represents the temperature 62°?  E
- 10) Which thermometer best represents the temperature 84°?  G

Answers

1.  D
2.  J
3.  F
4.  I
5.  B
6.  A
7.  C
8.  H
9.  E
10.  G

